

MICROORGANISMS: FRIEND AND FOE

WORKSHEET -2/ MODULE - 4

CLASS VIII

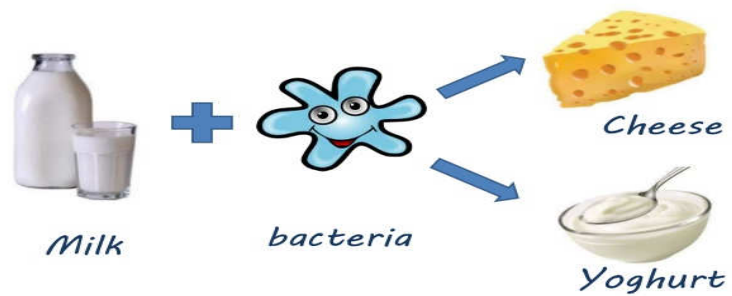
SUBJECT: SCIENCE

Answer the following questions:

Q.1. Identify the below mentioned figures and write few lines about it.

a.

Some microorganisms are good!



b.

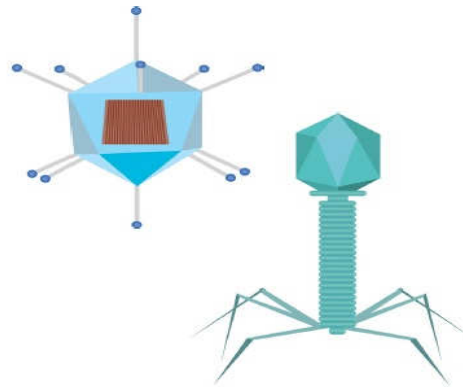
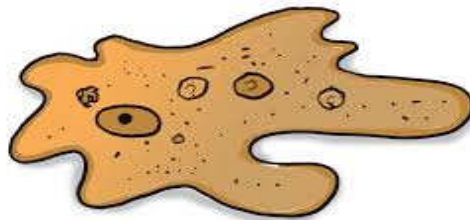
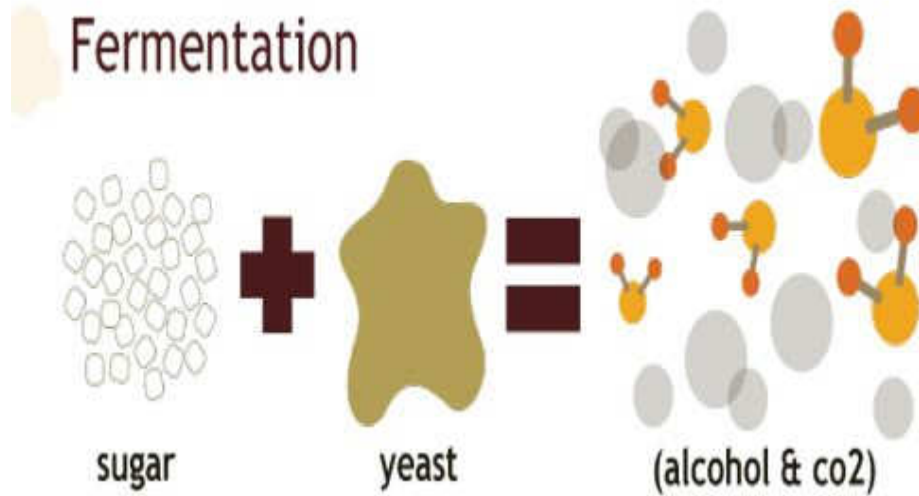


Fig. 2.5 : Viruses

c.



d.



e.



Q 2. Describe the role of Rhizobium in leguminous plants.

Q 3. a Name the mosquito that spread malaria.

b. What is the name given to such organisms that spread diseases from an infected person to healthy person.

Q4. Why should we keep a handkerchief on nose and mouth while sneezing?

Q5. Draw diagram of roots of a leguminous plant and show root nodules on it.